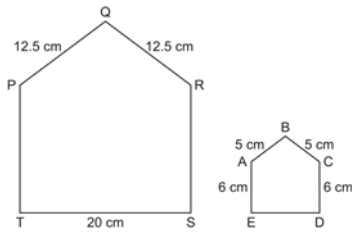


Name: _____

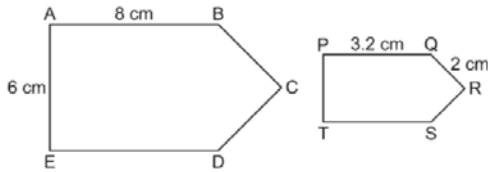
Date: _____

Math 9 HW Section 7.3 Similar Polygons

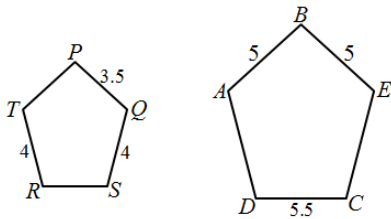
1. Given that the following polygons are similar, find the lengths of PT and DE.



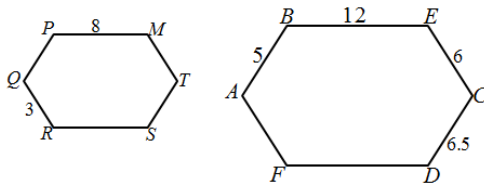
- b) Find the lengths of BC and PT:



- c) Find the lengths of RS and EC:



- d) Find the lengths of PQ, AF, and MT:



2. Given the following set of shapes, indicate whether if they are similar or not:

